

Redox reactions – Using E° tables to predict reactions.

Lesson 4c

A student has set up the following 6 galvanic cells as shown below. Using the E° tables predict if electrical energy, heat energy or no energy is produced in each.

If electrical energy is produced then:

When predicting if a reaction will occur to produce electrical energy in a galvanic cell, two things must be taken into account.

1) The strongest oxidant present is above the strongest reductant present

2) The strongest oxidant and the strongest reductant are in separate half-cells

Yes electrical energy will be produced as the strongest reductant (Mg) and the strongest oxidant (H⁺) are in separate half cells.

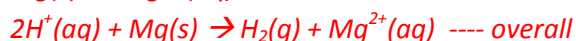
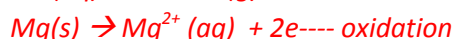
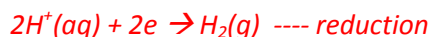
- identify the anode and cathode

- direction of electron flow

- direction of cation movement

- the theoretical voltage at standard conditions **2.34 volt**

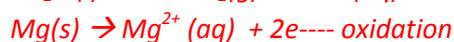
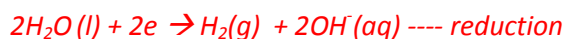
- write the oxidation and reduction half equations and overall equation.



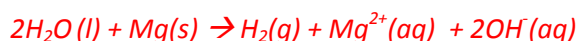
$2\text{H}^+(\text{aq}) + 2\text{e}^- \rightarrow \text{H}_2(\text{g})$	0.00
$\text{Pb}^{2+}(\text{aq}) + 2\text{e}^- \rightarrow \text{Pb}(\text{s})$	-0.13
$\text{Sn}^{2+}(\text{aq}) + 2\text{e}^- \rightarrow \text{Sn}(\text{s})$	-0.14
$\text{Ni}^{2+}(\text{aq}) + 2\text{e}^- \rightarrow \text{Ni}(\text{s})$	-0.23
$\text{Co}^{2+}(\text{aq}) + 2\text{e}^- \rightarrow \text{Co}(\text{s})$	-0.28
$\text{Fe}^{2+}(\text{aq}) + 2\text{e}^- \rightarrow \text{Fe}(\text{s})$	-0.44
$\text{Zn}^{2+}(\text{aq}) + 2\text{e}^- \rightarrow \text{Zn}(\text{s})$	-0.76
$2\text{H}_2\text{O}(\text{l}) + 2\text{e}^- \rightarrow \text{H}_2(\text{g}) + 2\text{OH}^-(\text{aq})$	-0.83
$\text{Mn}^{2+}(\text{aq}) + 2\text{e}^- \rightarrow \text{Mn}(\text{s})$	-1.03
$\text{Al}^{3+}(\text{aq}) + 3\text{e}^- \rightarrow \text{Al}(\text{s})$	-1.67
$\text{Mg}^{2+}(\text{aq}) + 2\text{e}^- \rightarrow \text{Mg}(\text{s})$	-2.34

No, electrical energy will not be produced as the strongest reductant (Mg) and the strongest oxidant (H₂O) are in the same half cell.

Heat energy will be produced as the following reactions take place in the half cell on the left.



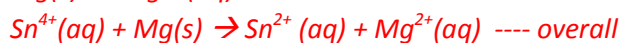
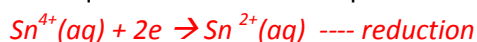
Overall



$\text{Sn}^{2+}(\text{aq}) + 2\text{e}^- \rightarrow \text{Sn}(\text{s})$	-0.14
$\text{Ni}^{2+}(\text{aq}) + 2\text{e}^- \rightarrow \text{Ni}(\text{s})$	-0.23
$\text{Co}^{2+}(\text{aq}) + 2\text{e}^- \rightarrow \text{Co}(\text{s})$	-0.28
$\text{Fe}^{2+}(\text{aq}) + 2\text{e}^- \rightarrow \text{Fe}(\text{s})$	-0.44
$\text{Zn}^{2+}(\text{aq}) + 2\text{e}^- \rightarrow \text{Zn}(\text{s})$	-0.76
$2\text{H}_2\text{O}(\text{l}) + 2\text{e}^- \rightarrow \text{H}_2(\text{g}) + 2\text{OH}^-(\text{aq})$	-0.83
$\text{Mn}^{2+}(\text{aq}) + 2\text{e}^- \rightarrow \text{Mn}(\text{s})$	-1.03
$\text{Al}^{3+}(\text{aq}) + 3\text{e}^- \rightarrow \text{Al}(\text{s})$	-1.67
$\text{Mg}^{2+}(\text{aq}) + 2\text{e}^- \rightarrow \text{Mg}(\text{s})$	-2.34

Yes electrical energy will be produced as the strongest reductant (Mg) and the strongest oxidant (Sn^{4+}) are in separate half cells.

- identify the anode and cathode
- direction of electron flow
- direction of cation movement
- the theoretical voltage at standard conditions **2.52 volt**
- write the oxidation and reduction half equations and overall equation.

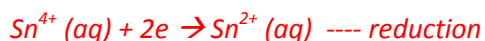


3

$\text{Sn}^{4+}(\text{aq}) + 2\text{e}^- \rightleftharpoons \text{Sn}^{2+}(\text{aq})$	+0.15
$\text{Cd}^{2+}(\text{aq}) + 2\text{e}^- \rightleftharpoons \text{Cd}(\text{s})$	-0.40
$\text{Fe}^{2+}(\text{aq}) + 2\text{e}^- \rightleftharpoons \text{Fe}(\text{s})$	-0.44
$\text{Zn}^{2+}(\text{aq}) + 2\text{e}^- \rightleftharpoons \text{Zn}(\text{s})$	-0.76
$2\text{H}_2\text{O}(\text{l}) + 2\text{e}^- \rightleftharpoons \text{H}_2(\text{g}) + 2\text{OH}^-(\text{aq})$	-0.83
$\text{Mn}^{2+}(\text{aq}) + 2\text{e}^- \rightleftharpoons \text{Mn}(\text{s})$	-1.18
$\text{Al}^{3+}(\text{aq}) + 3\text{e}^- \rightleftharpoons \text{Al}(\text{s})$	-1.66
$\text{Mg}^{2+}(\text{aq}) + 2\text{e}^- \rightleftharpoons \text{Mg}(\text{s})$	-2.37

No, electrical energy will not be produced as the strongest reductant (Mg) and the strongest oxidant (Sn^{4+}) are in the same half cell.

Heat energy will be produced as the following reactions take place in the half cell on the left.



Overall



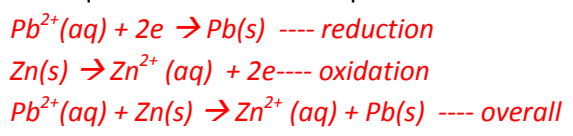
4

$\text{Sn}^{4+}(\text{aq}) + 2\text{e}^- \rightleftharpoons \text{Sn}^{2+}(\text{aq})$	+0.15
$\text{Cd}^{2+}(\text{aq}) + 2\text{e}^- \rightleftharpoons \text{Cd}(\text{s})$	-0.40
$\text{Fe}^{2+}(\text{aq}) + 2\text{e}^- \rightleftharpoons \text{Fe}(\text{s})$	-0.44
$\text{Zn}^{2+}(\text{aq}) + 2\text{e}^- \rightleftharpoons \text{Zn}(\text{s})$	-0.76
$2\text{H}_2\text{O}(\text{l}) + 2\text{e}^- \rightleftharpoons \text{H}_2(\text{g}) + 2\text{OH}^-(\text{aq})$	-0.83
$\text{Mn}^{2+}(\text{aq}) + 2\text{e}^- \rightleftharpoons \text{Mn}(\text{s})$	-1.18
$\text{Al}^{3+}(\text{aq}) + 3\text{e}^- \rightleftharpoons \text{Al}(\text{s})$	-1.66
$\text{Mg}^{2+}(\text{aq}) + 2\text{e}^- \rightleftharpoons \text{Mg}(\text{s})$	-2.37

5

Yes electrical energy will be produced as the strongest reductant (Zn) and the strongest oxidant (Pb²⁺) are in separate half cells.

- identify the anode and cathode
- direction of electron flow
- direction of cation movement
- the theoretical voltage at standard conditions **0.63 volt**
- write the oxidation and reduction half equations and overall equation.

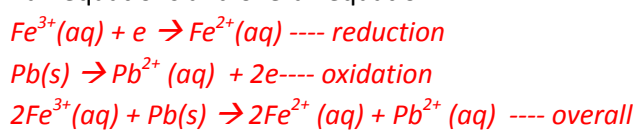


$Pb^{2+}(aq) + 2e^- \rightleftharpoons Pb(s)$	-0.13
$Sn^{2+}(aq) + 2e^- \rightleftharpoons Sn(s)$	-0.14
$Ni^{2+}(aq) + 2e^- \rightleftharpoons Ni(s)$	-0.25
$Co^{2+}(aq) + 2e^- \rightleftharpoons Co(s)$	-0.28
$Cd^{2+}(aq) + 2e^- \rightleftharpoons Cd(s)$	-0.40
$Fe^{2+}(aq) + 2e^- \rightleftharpoons Fe(s)$	-0.44
$Zn^{2+}(aq) + 2e^- \rightleftharpoons Zn(s)$	-0.76

6

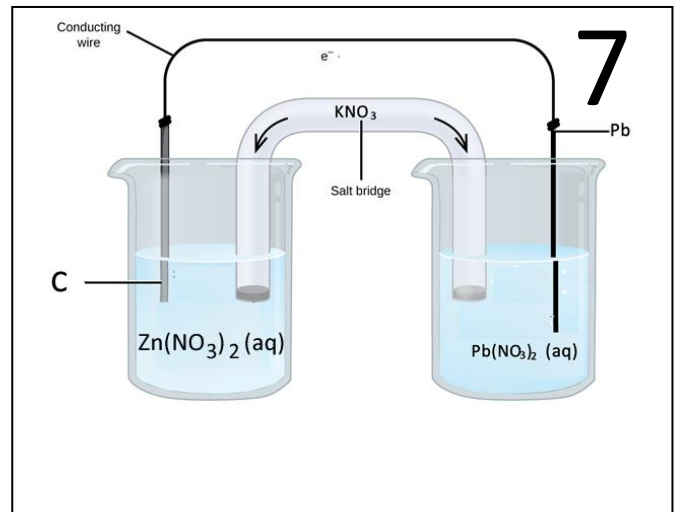
Yes electrical energy will be produced as the strongest reductant (Pb) and the strongest oxidant (Fe³⁺) are in separate half cells.

- identify the anode and cathode
- direction of electron flow
- direction of cation movement
- the theoretical voltage at standard conditions **0.90 volt**
- write the oxidation and reduction half equations and overall equation.



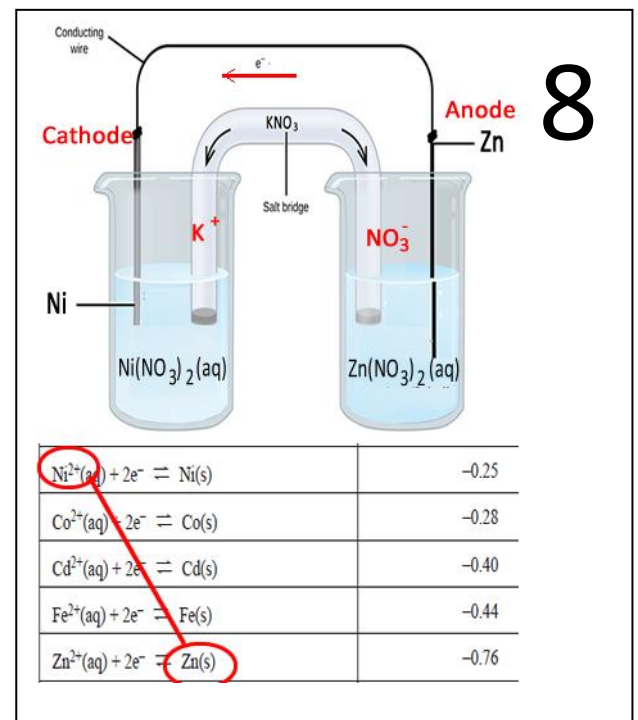
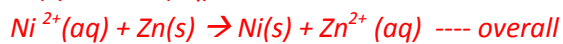
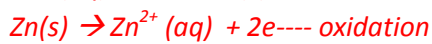
$Fe^{3+}(aq) + e^- \rightleftharpoons Fe^{2+}(aq)$	+0.77
$Cu^{2+}(aq) + 2e^- \rightleftharpoons Cu(s)$	+0.34
$Sn^{4+}(aq) + 2e^- \rightleftharpoons Sn^{2+}(aq)$	+0.15
$S(s) + 2H^+(aq) + 2e^- \rightleftharpoons H_2S(g)$	+0.14
$2H^+(aq) + 2e^- \rightleftharpoons H_2(g)$	0.00
$Pb^{2+}(aq) + 2e^- \rightleftharpoons Pb(s)$	-0.13

No energy is produced as the strongest oxidant, $Pb^{2+}(aq)$ has no reductant below it on the E° table. Or it can also be stated that the strongest reductant, $Pb(s)$ has no oxidant above it.



Yes electrical energy will be produced as the strongest reductant (Zn) has an oxidant (Ni^{2+}) above it on the E° table and are in separate half cells.

- identify the anode and cathode
- direction of electron flow
- direction of cation movement
- the theoretical voltage at standard conditions **0.51 volt**
- write the oxidation and reduction half equations and overall equation.



$Ni^{2+}(aq) + 2e^{-} \rightleftharpoons Ni(s)$	-0.25
$Co^{2+}(aq) + 2e^{-} \rightleftharpoons Co(s)$	-0.28
$Cd^{2+}(aq) + 2e^{-} \rightleftharpoons Cd(s)$	-0.40
$Fe^{2+}(aq) + 2e^{-} \rightleftharpoons Fe(s)$	-0.44
$Zn^{2+}(aq) + 2e^{-} \rightleftharpoons Zn(s)$	-0.76